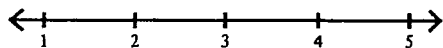
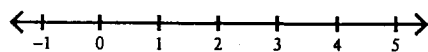


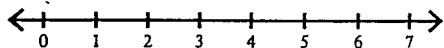
$$11) a - 15 > -4(-6 + 3a)$$



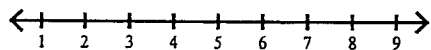
$$12) 3(6b - 1) > 18 - 3b$$



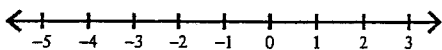
$$13) 26 + m \geq 5(-6 + 3m)$$



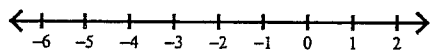
$$14) 20 - 2p > -2(p + 2) + 4p$$



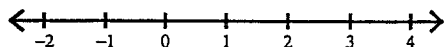
$$15) x + 1 + 1 + 6x > 3(x - 4) - (x - 4)$$



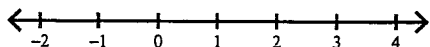
$$16) -6(1 + 6x) < 6(1 - 5x)$$



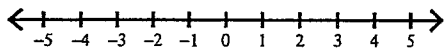
$$17) 2(1 - 4r) < -2(r + 3) - 4$$




$$18) -6(1 + 2x) \geq 6(2x - 1) + 2x$$



$$19) -2(1 - 5x) > -(x + 1) - 1$$



$$20) 5x - (x + 2) > -5(1 + x) + 3$$



Critical thinking questions:

21) Write an inequality with x on both sides whose solution is $x \geq 2$

22) Name one particular solution to question #20.